




1 Realiza as operações de somar e indica o resultado correto.

a) $2 + 3 =$

b) $6 + 1 =$

c) $7 + 2 =$

2 Pinta apenas os animais que têm duas patas.



3 Soma agora as patas de todos os animais e assinala a resposta correta.

a) 6

b) 12

c) 10

d) 8

